



INDIAN SCHOOL AL WADI AL KABIR

MIDTERM REVISION PAPER 2024 – 2025

NAME:

DATE: / /

CLASS: IV SEC: _____ ROLL NO: _____

SUBJECT: EVS

TR'S SIGN:

General Instructions:

- This paper consists of 3 sections and 4 pages.
- All questions are compulsory.

SECTION – A

I. Read the following questions and circle the correct option.

1. We can buy road maps from _____.
(a) bookshops (b) libraries (c) homes (d) schools
2. A group of stars that forms a pattern in the sky is called as a _____.
(a) comet (b) constellation (c) satellite (d) asteroid
3. Equator is the imaginary line that divides the Earth into _____ parts.
(a) three (b) two (c) four (d) one
4. The direction which lies between two main directions is called _____.
(a) main direction (b) sub direction (c) north (d) south
5. A _____ is used to see stars, planets and the moon.
(a) microscope (b) hydroscope (c) telescope (d) kaleidoscope
6. The imaginary line that runs through the centre of the Earth from North Pole to the south pole is called the _____.
(a) equator (b) orbit (c) axis (d) line
7. A rough drawing of a place is called a _____.
(a) map (b) key (c) sketch (d) atlas
8. The asteroid belt is present between the orbit of _____ and _____.
(a) Saturn, Jupiter (b) Earth, Venus (c) Mars, Venus (d) Mars, Jupiter
9. The time period the Earth completes one rotation in 24 hours is called the _____.
(a) Solar Day (b) Solar Year (c) rotation (d) Solar Month
10. The nerves of the sense organs send messages to the _____.
(a) eyes (b) brain (c) stomach (d) senses

II. Match Column A with Column B.

| COLUMN A | COLUMN B |
|------------------------|--|
| 1. satellites | a) four taste buds |
| 2. southern hemisphere | b) layer below the mantle |
| 3. celestial bodies | c) part of the earth below the equator |
| 4. core | d) stars, planets, moon and objects in sky |
| 5. tongue | e) heavenly bodies that move around the planet |

Ans: 1. _____ 2. _____ 3. _____ 4. _____ 5. _____





III. State whether the following statements are True or False.

1. Artificial satellites are used for communication and weather forecasting. _____
2. The earth takes 24 years to complete one revolution. _____
3. The nerves of the nose send messages to the brain to hear sounds. _____
4. With a road map, we can easily locate any house in the colony. _____

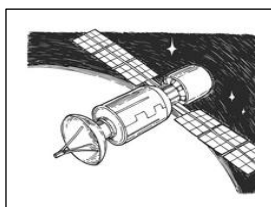
SECTION – B

IV. Observe the given pictures and answer the questions that follow.


1. Observe the symbols given below and write what each symbol symbolizes.

| | |
|---|--|
|  |  |
| a. | b. |
|  |  |
| d. | e. |

2. A. Identify the pictures and name them.

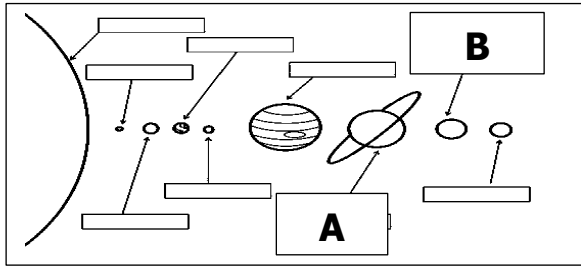


a.



b.

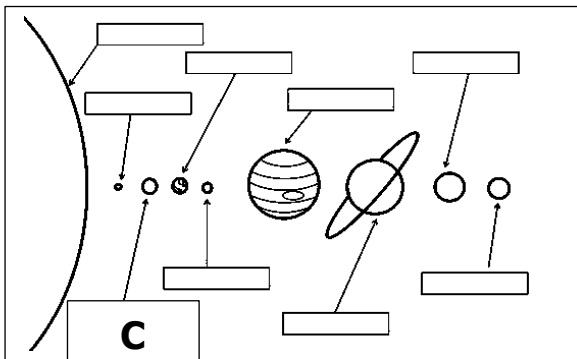
B. Identify the planet marked as A and B.



A- _____

B- _____

C. Identify the planet C and fill in the blanks.

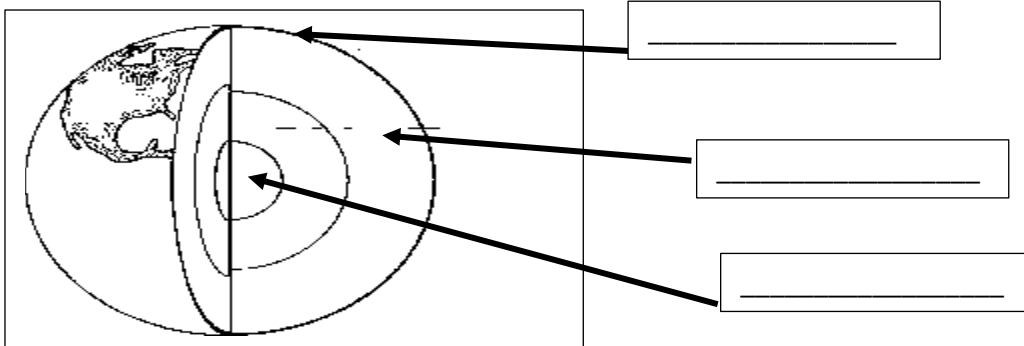


a) I am the brightest and the _____ planet.

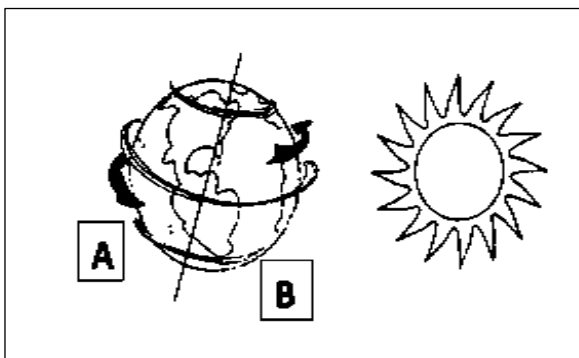
b) I am also called the _____ and _____ star.

c) I am _____

3. A. Label the internal structure of the earth shown in the picture below.



B. Observe the given picture and answer the questions that follow.



a. The picture alongside shows spinning of the Earth. It is called _____.

b. It causes _____ and _____

c. The part of the Earth labelled A has _____ and the part of the Earth labelled B has _____.

SECTION – C

V. Give reasons for the following statements.

1. Maps are considered as our friends and guides.

2. The Sun appears to rise in the east and set in the west.

3. The sun is important to us.

VI. Answer the following questions.

1. List the four elements that are called the language of a map.

2. Why is Earth called as the blue Planet?

3. The northern hemisphere has winter when the southern hemisphere experiences summer.

4. What are sense organs? Name them.
